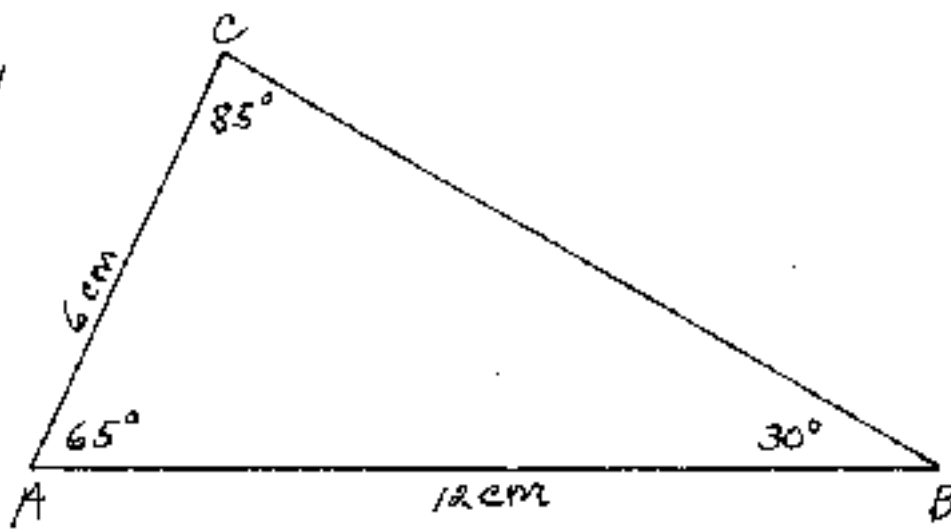


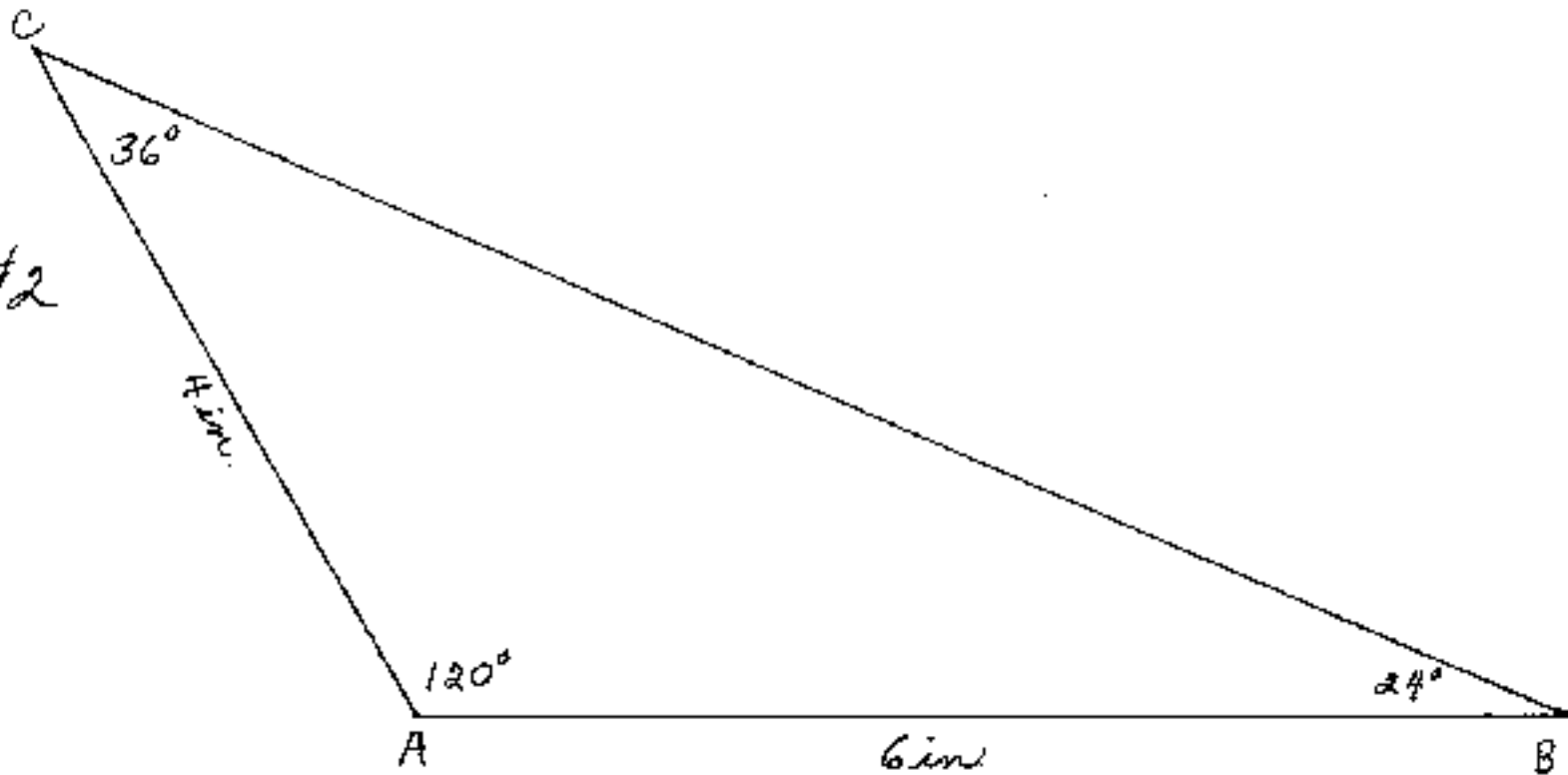
1	<b>Task 1</b> Draw a 12 cm line. Label the line AB.  Check and Initial _____	<b>Task 2</b> Using point A as the center point, mark a 65° angle.  Check and Initial _____
	<b>Task 3</b> Using center point A and the angle mark, draw a 6 cm line. Label the endpoint C.  Check and Initial _____	<b>Task 4</b> Connect C and B to make the 3 <sup>rd</sup> side of the triangle. Measure angles A, B, and C and sides A, B, and C. Make sure all sides and angles are labeled.
2	<b>Task 1</b> Draw a 6 inch line. Label the line AB.  Check and Initial _____	<b>Task 2</b> Using point A as the center point, mark a 120° angle.  Check and Initial _____
	<b>Task 3</b> Using center point A and the angle mark, Draw a 4 inch line. Label the endpoint C.  Check and Initial _____	<b>Task 4</b> Connect C and B to make the 3 <sup>rd</sup> side of the triangle. Measure angles A, B, and C and sides A, B, and C. Make sure all sides and angles are labeled.
3	<b>Task 1</b> Draw a 7 cm line. Label the line AB.  Check and Initial _____	<b>Task 2</b> Using point A as the center point, mark a 40° angle.  Check and Initial _____
	<b>Task 3</b> Using center point A and the angle mark, draw a 9 cm line. Label the endpoint C.  Check and Initial _____	<b>Task 4</b> Connect C and B to make the 3 <sup>rd</sup> side of the triangle. Measure angles A, B, and C and sides A, B, and C. Make sure all sides and angles are labeled.
4	<b>Task 1</b> Draw a $3\frac{1}{2}$ inch line. Label the line AB.  Check and Initial _____	<b>Task 2</b> Using point A as the center point, mark a 115° angle.  Check and Initial _____
	<b>Task 3</b> Using center point A and the angle mark, draw a 5 inch line. Label the endpoint C.  Check and Initial _____	<b>Task 4</b> Connect C and B to make the 3 <sup>rd</sup> side of the triangle. Measure angles A, B, and C and sides A, B, and C. Make sure all sides and angles are labeled.

**Caution: The following images may not be to correct scale due to scanning discrepancies.**

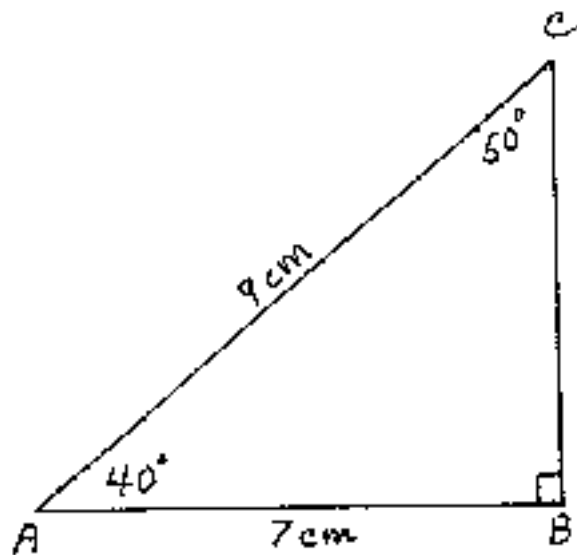
#1



#2



#3



#4

